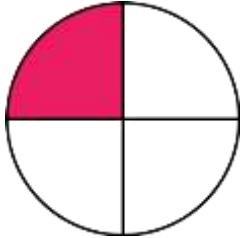


ΔΗΜΟΤΙΚΟ ΣΧΟΛΕΙΟ .....

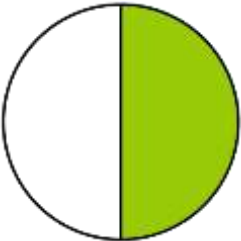
Όνομα: \_\_\_\_\_ Τάξη: \_\_\_\_\_

Κλάσματα

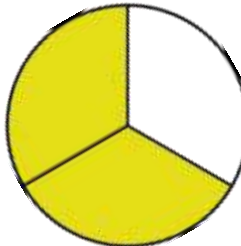
Τι μέρος της επιφάνειας είναι σκιασμένο;



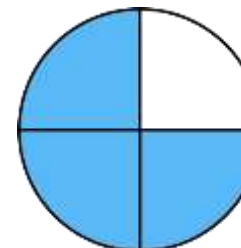
- $\frac{1}{2}$    
   $\frac{3}{4}$    
   $\frac{1}{4}$    
   $\frac{1}{3}$



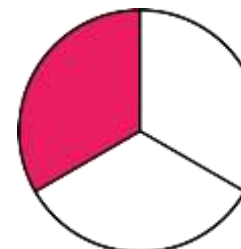
- $\frac{2}{3}$    
   $\frac{2}{4}$    
   $\frac{1}{4}$    
   $\frac{1}{2}$



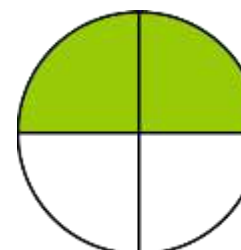
- $\frac{3}{4}$    
   $\frac{1}{2}$    
   $\frac{2}{3}$    
   $\frac{1}{3}$



- $\frac{2}{4}$    
   $\frac{3}{4}$    
   $\frac{1}{3}$    
   $\frac{1}{4}$



- $\frac{1}{4}$    
   $\frac{1}{2}$    
   $\frac{3}{4}$    
   $\frac{1}{3}$



- $\frac{1}{4}$    
   $\frac{2}{3}$    
   $\frac{2}{4}$    
   $\frac{3}{4}$